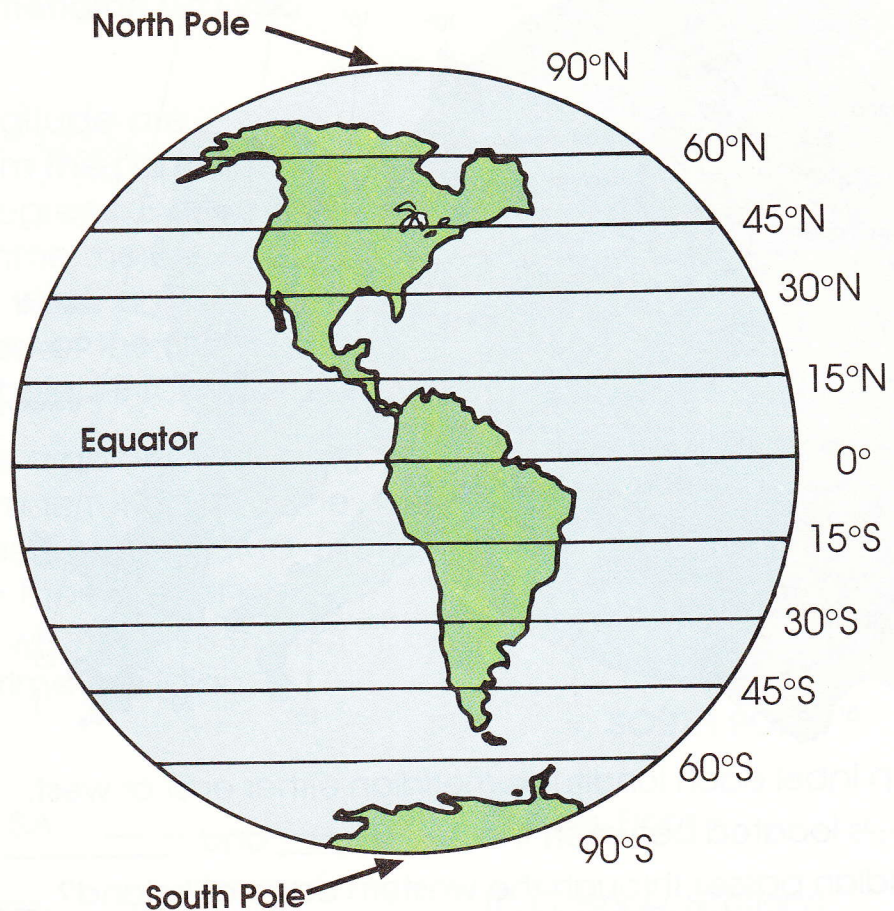


Lines of Latitude

Lines of latitude on a globe are called parallels. They run east and west. The equator is at 0° latitude. Use the map below to answer the questions.



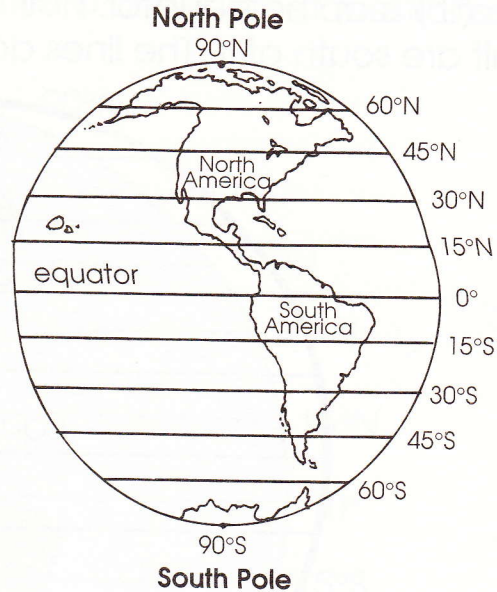
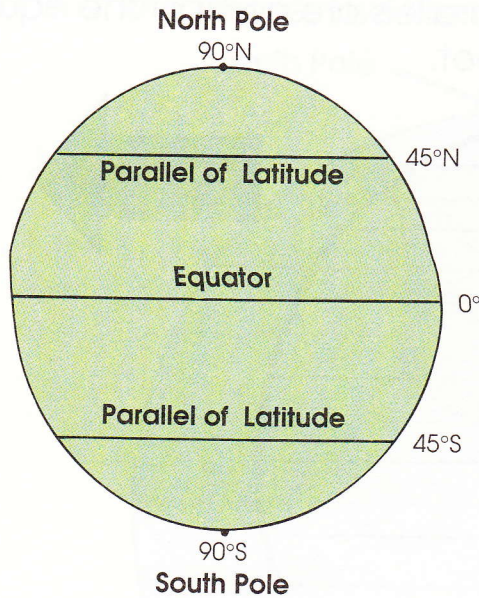
- 0° latitude is called the _____.
- Lines of latitude are called _____.
- Parallels run which directions? _____ and _____.
- The latitude of the North Pole is _____.
- Which parallel runs through Florida? _____
- What is located at 90°S latitude? _____
- Which parallel runs through Canada? _____
- Lines of latitude above the equator are which direction? _____
- Below the equator, the parallels are which direction? _____

Name _____

Lines of Latitude

Imaginary Lines

Directions: Answer the questions below using these maps.

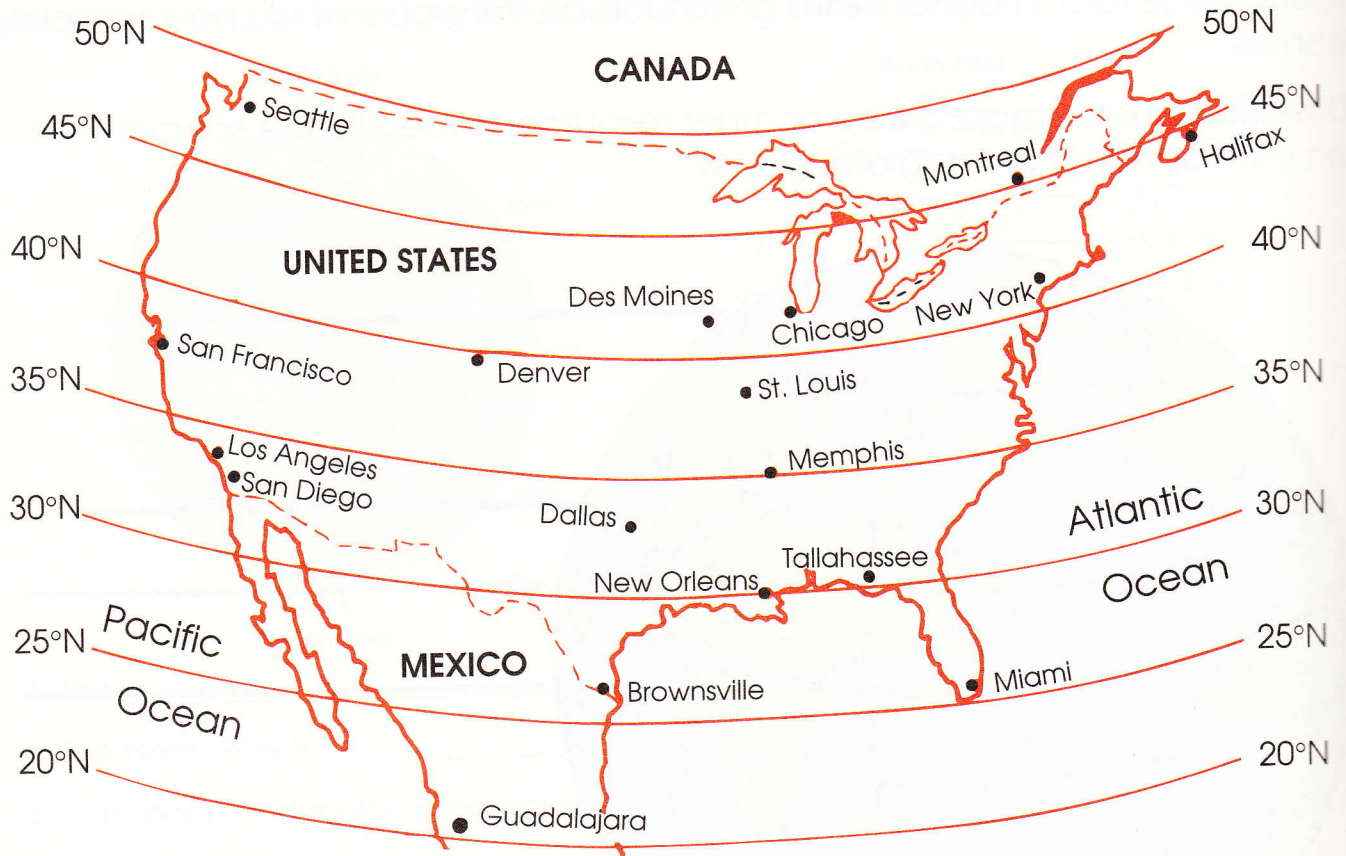


1. The _____ is 0° latitude.
2. The North Pole is _____ degrees north latitude.
4. Lines north and south of the equator are called _____.
5. The _____ is 90° S latitude.
6. Which line is closer to the equator— 30° N or 15° S? _____
7. Which is closer to the South Pole— 45° S or 30° S? _____
8. At what degree is the South Pole? _____
9. If you wanted to find a city located at 45° N, would you look above or below the equator? _____
10. Which continent on the map is entirely north of the equator? _____
11. South America lies between the parallels of latitude _____ $^\circ$ N and 60° S.
12. The equator runs through the northern part of the continent of _____.
13. Color all the land north of the equator red.
14. Color all of the land south of the equator green.

Name _____

Lines of Latitude

Across the U.S.A.

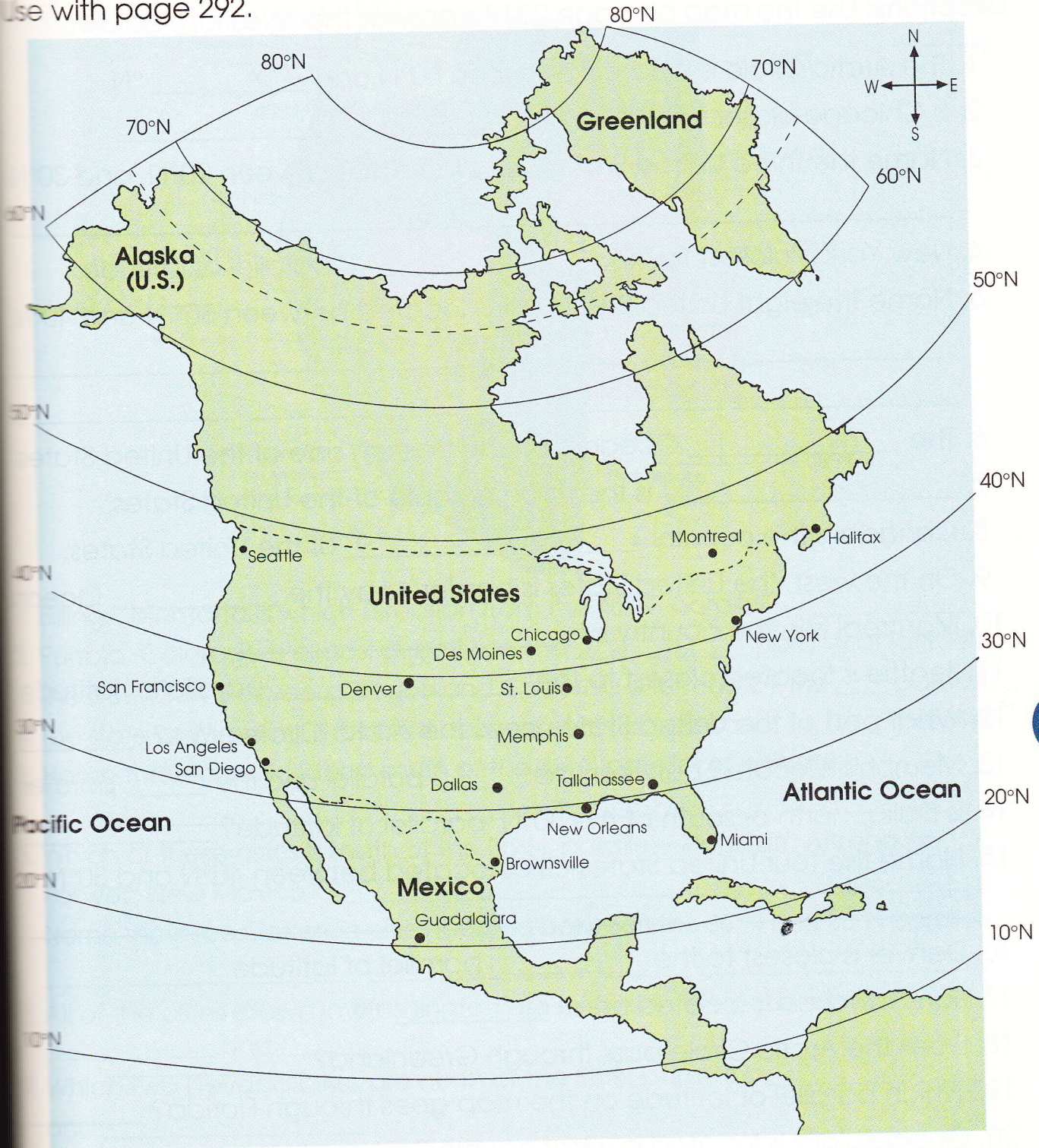


Directions: Use the map above to answer these questions.

1. Denver and New York are close to which parallel? _____
2. Which two cities are between 45°N and 50°N? _____
3. Los Angeles and Memphis are near which parallel? _____
4. Tallahassee is closest to which parallel? _____
5. St. Louis is between which parallels? _____ and _____
6. Which city is farthest north? _____ It is between which parallels? _____ and _____
7. Which city is farthest south? _____ It is between which parallels? _____ and _____
8. San Francisco is halfway between _____ and _____

Latitude in North America.

Use with page 292.



Lines of Latitude

Latitude in North America

Directions: Use the map on page 291 to answer the questions below.

1. The Arctic Circle is located between 60°N and _____ $^{\circ}\text{N}$.
2. Is Chicago closer to 40°N or 50°N ? _____
3. Name the three United States cities located between 20°N and 30°N .

4. New York is closest to the _____ parallel of latitude.
5. Name the eight United States cities located between 30°N and 40°N .

6. The _____ Ocean is on the eastern side of the United States.
7. _____ is the country south of the United States.
8. Canada is the country _____ of the United States.
9. On the west, the United States is bordered by the _____ Ocean.
10. Montreal is in the country of _____.
11. Seattle is located closest to the _____ parallel of latitude.
12. What part of the United States does the Arctic Circle cross? _____
13. Memphis is located between the _____ parallel and the _____ parallel.
14. Is Dallas north or south of the 30°N parallel of latitude? _____
15. Name the four United States cities located between 40°N and 50°N .

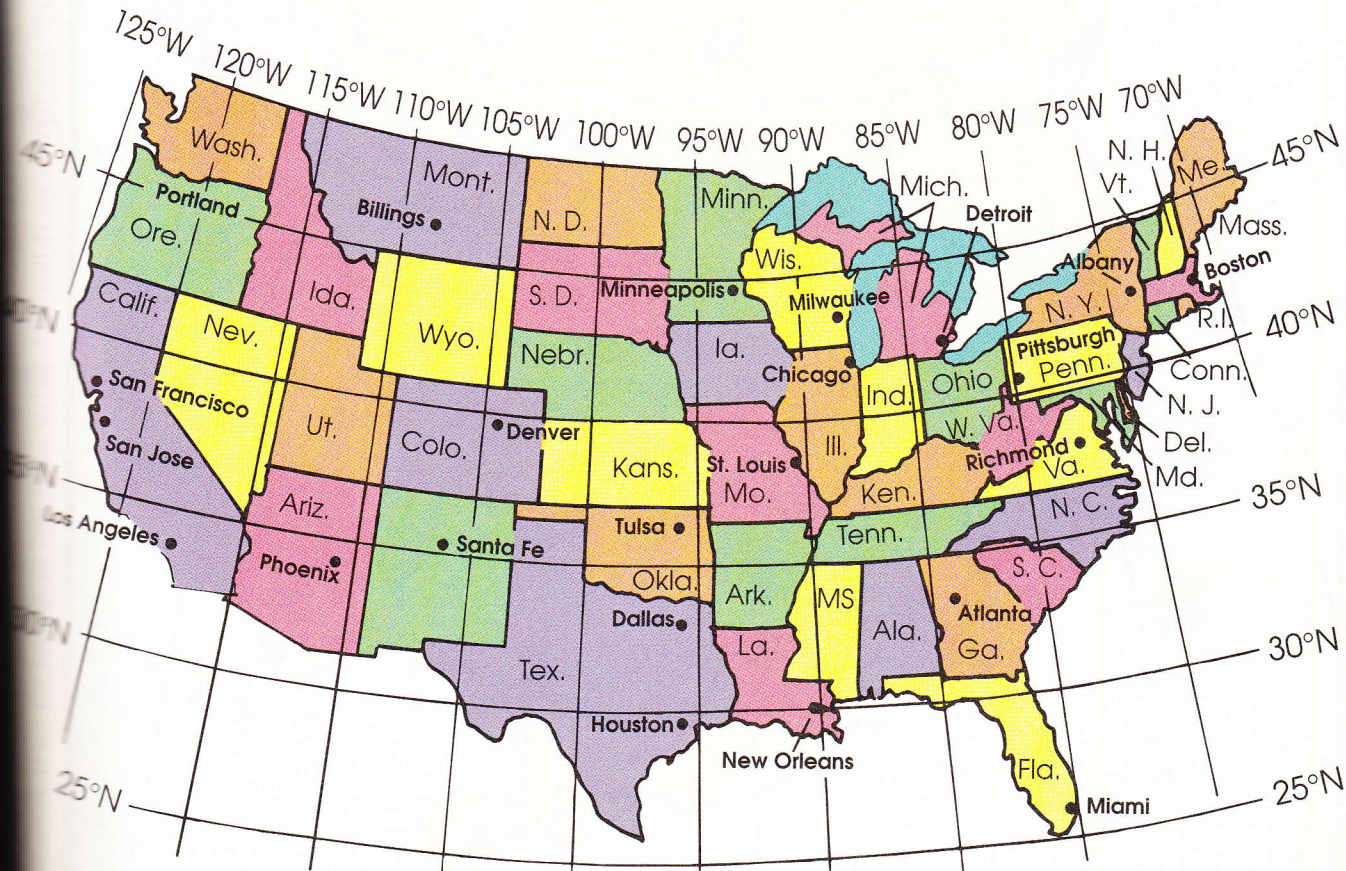
16. Denver is closest to the _____ parallel of latitude.
17. San Francisco is located near _____ $^{\circ}\text{N}$.
18. Does the Arctic Circle pass through Greenland? _____
19. Which parallel of latitude on the map goes through Florida? _____
20. Guadalajara is located in what country? _____

Name _____

Latitude and Longitude

See the U.S.A.

Use the coordinates to plan a trip across the U.S.A.



Directions: Write the name of the city closest to the intersection.

Your trip begins at 40°N / 105°W, the Mile-High City.

You fly over the Rocky Mountains to 45°N / 125°W.

Now, to 35°N / 105°W in New Mexico.

Next, stop is Texas, the city of . . . 30°N / 95°W.

It's Mardi Gras time at 30°N / 90°W.

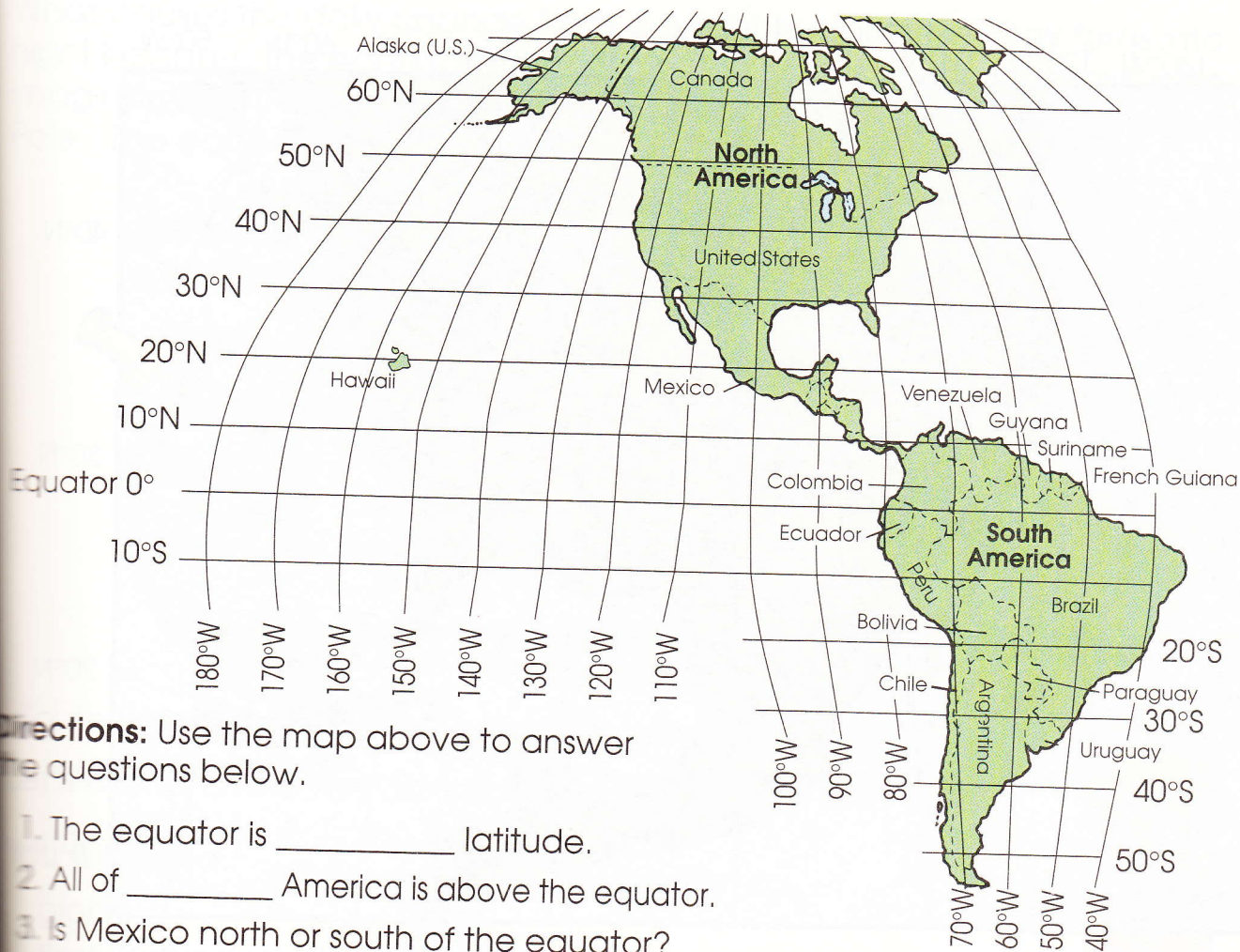
Then, fun in the sun and the Atlantic Ocean 25°N / 80°W.

To the Gateway Arch in the city of . . . 40°N / 90°W.

The Steelers play football here—40°N / 80°W.

Next, to the capital of New York—40°N / 75°W.

Latitude and Longitude Lines



Directions: Use the map above to answer the questions below.

1. The equator is _____ latitude.
2. All of _____ America is above the equator.
3. Is Mexico north or south of the equator? _____
4. Name one state located west of the 140°W meridian. _____
5. Is the United States located above or below the equator? _____
6. Is Peru east or west of the 60°W meridian? _____
7. Peru is located between the equator and the _____ latitude line.
8. Guyana, Suriname and French Guiana are all located between the 50°W meridian and the _____ meridian.
9. All of Canada is located above which parallel— 60°N or 40°N? _____
10. Name the longitude lines which pass through Argentina. _____
11. Name the two longitude lines which pass through Mexico. _____
12. Is most of Colombia north or south of the equator? _____